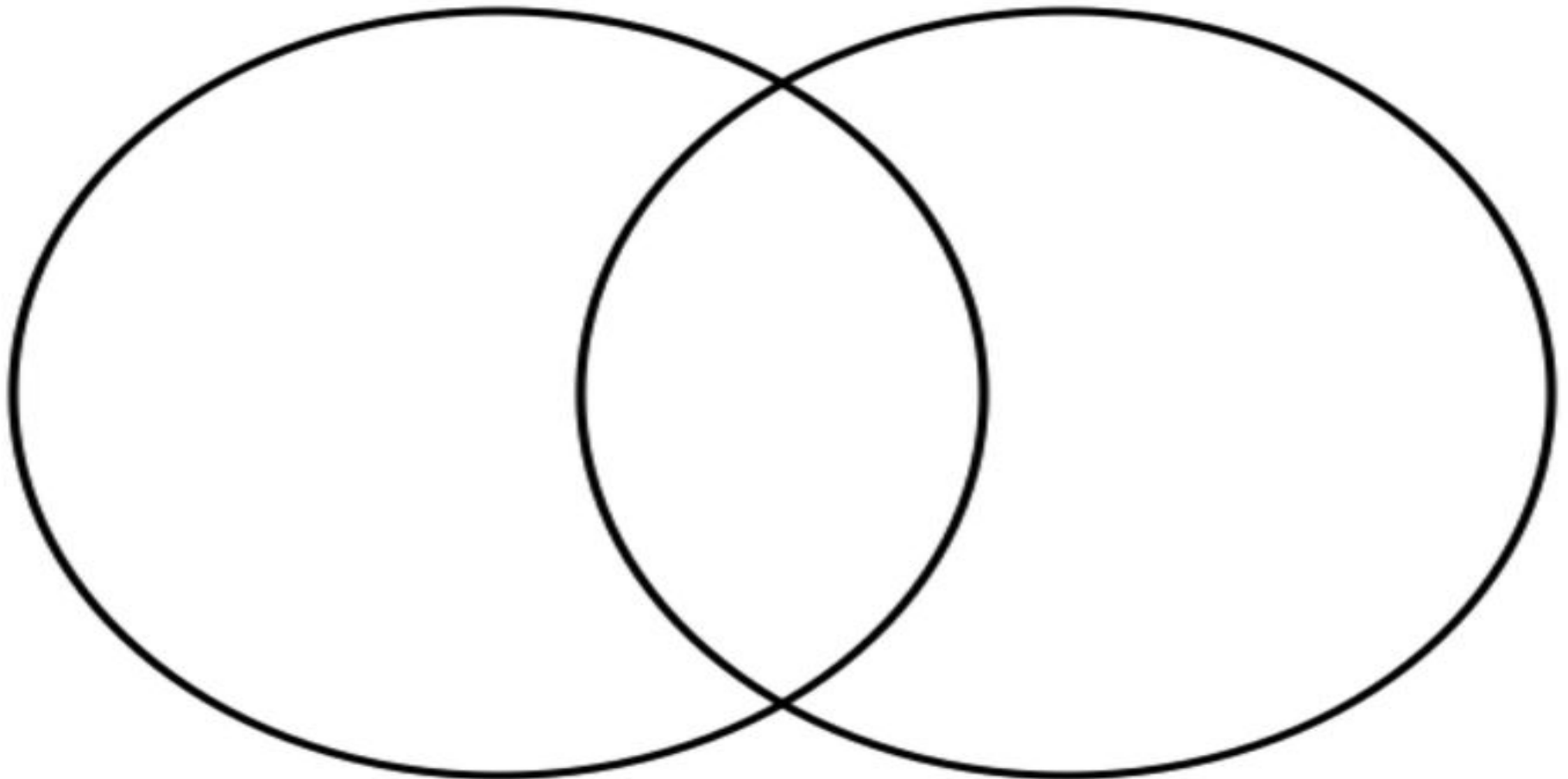



# Compare two sea creatures

Choose two animals that live in water. Write one fact that is different about each animal and one fact that is the same about the animals.





# Splash the Nonsense Words!

Read each word and decide if it is real or nonsense. Color in the nonsense words with a blue crayon.

OR

Write these words with sidewalk chalk outside. Be sure to read each word as you write it and then use a spray bottle or water to splash away the nonsense words.

\*\* Super Challenge: Use the words that are left to write a sentence or two.

jez

hot

rab

cod

wid

bup

sun

pov

crab

squid

swim

yun

sand

dif

fish

hep

tan

gip

fun

kag

ship

leb

shell

wet

My fish is \_\_\_\_\_.

It can \_\_\_\_\_.

My fish likes to \_\_\_\_\_.

It is \_\_\_\_\_.

My fish can \_\_\_\_\_.

Kindergarten

# A Whole Year Smarter!

I learned so many things this year!

I learned \_\_\_\_\_  
\_\_\_\_\_  
\_\_\_\_\_

I learned \_\_\_\_\_  
\_\_\_\_\_  
\_\_\_\_\_



Solve these!

$3+2= \underline{\quad}$

$1+2= \underline{\quad}$

$5+5= \underline{\quad}$

$1+6= \underline{\quad}$

$1+8= \underline{\quad}$

$4+4= \underline{\quad}$

$0+0= \underline{\quad}$

$1+9= \underline{\quad}$

$10+3= \underline{\quad}$

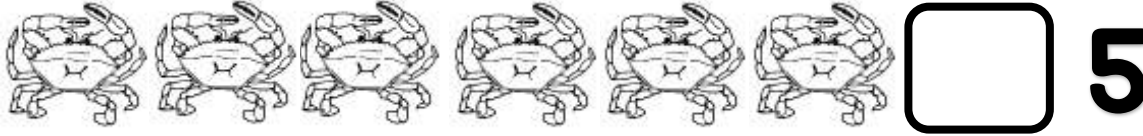
When I went to the park, I saw 4 blue flowers and 5 pink flowers. How many flowers did I see altogether?

**sum** \_\_\_\_\_

On Monday, the shark ate 2 fish. On Tuesday, it ate 4 more fish. How many fish did the shark eat in all?

**sum** \_\_\_\_\_

In each row, count the objects and look at the numeral. Decide if a  $<$ ,  $>$ , or  $=$  needs to go in the box!



I found 6 seeds in my watermelon. My dog ate 4 of the seeds. How many seeds are left?

I bought 8 balloons for the party. 2 balloons popped! How many balloons do I have left?

difference \_\_\_\_\_

difference \_\_\_\_\_

Color the number that is smaller or less in each set.

23	15
----	----

16	9
----	---

8	24
---	----

11	0
----	---

25	27
----	----

100	63
-----	----

21	30
----	----

32	50
----	----

28	80
----	----

42	99
----	----

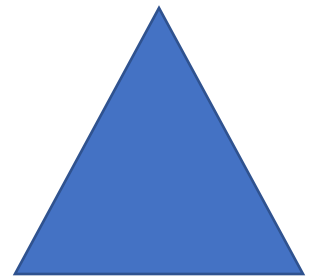

47	74
----	----

13	29
----	----

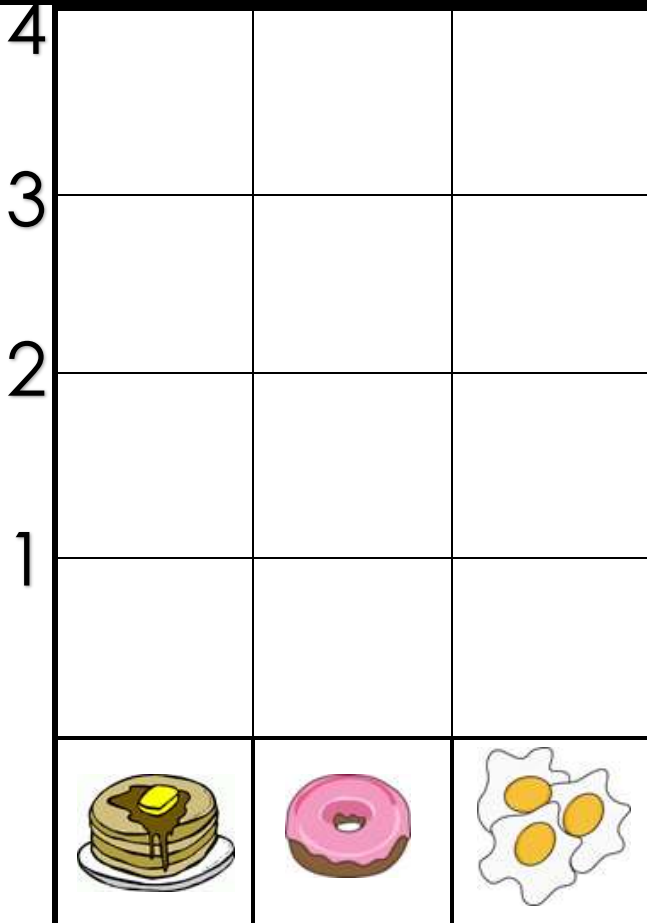
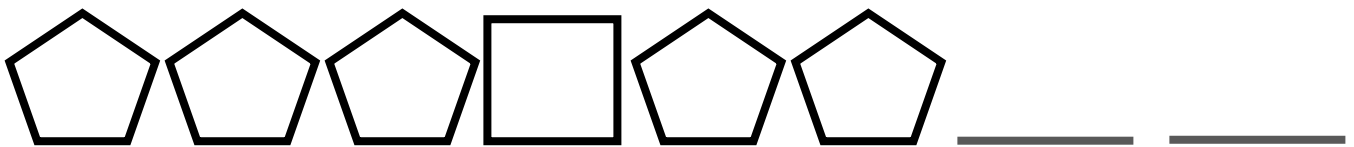

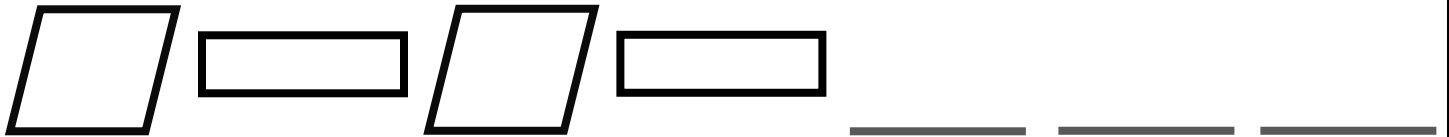
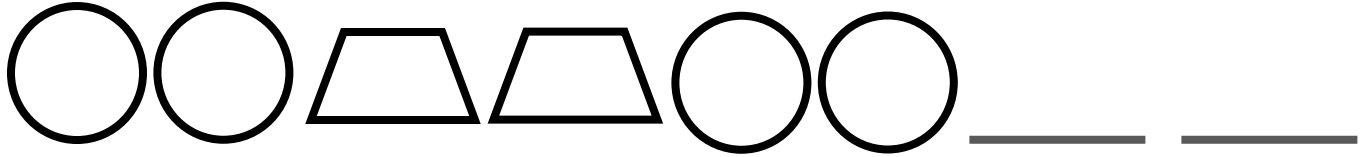
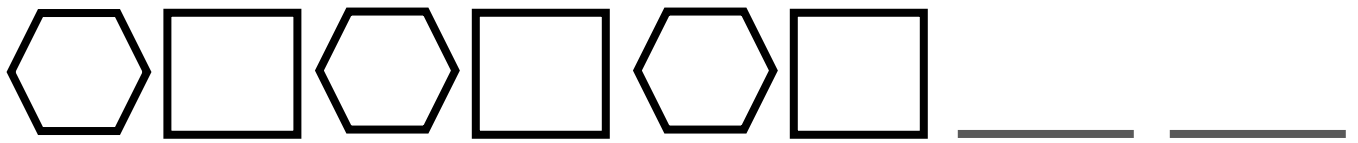
Look at the shape above the box. Find or think of a real life object that is the same shape & draw it in the box!

Watch this video about 2-D and 3-D Shapes!

<https://safeyoutube.net/w/UsqH>



Complete the patterns below!



Ask your family members which would be their favorite choice for breakfast and complete the graph. Then answer the questions below!

Which breakfast food did people in your family like the least?  
\_\_\_\_\_

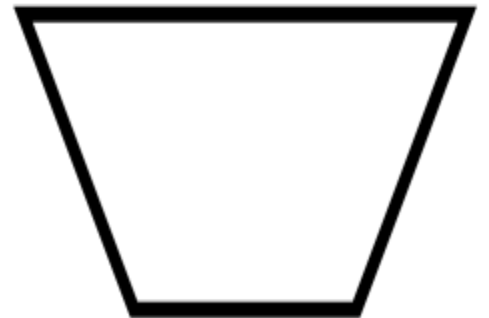
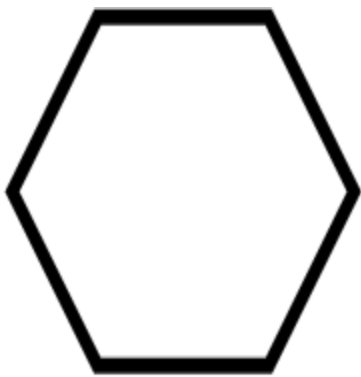
How many people in your family chose eggs as their favorite breakfast food?  
\_\_\_\_\_



Complete this dot-to-dot by connecting the dots from 1 to 25. Color when finished!



Count how many sides on each shape. Write the number in the middle of the shape!




Fill in the missing numbers!

22, 23, \_\_\_\_\_, 25, \_\_\_\_\_, 27, 28, \_\_\_\_\_

Write all the numbers you say when counting by 10's to 100!


Check out this skip counting video!

<https://safeyoutube.net/w/MtrH>



Write numbers in the number sentence below to match the picture!

Draw a picture to match the number story below and solve it!

# of yellow pillows

Jack had 7 pillows on this bed. 4 pillows are blue. The rest are yellow. How many pillows are yellow?